






January Homework Calendar



	Monday	Tuesday	Wednesday	Thursday																																								
<p>Week 2</p> <p>(L. 11 sight words)</p> <p>blue, cold, far, little, live, their, water, where</p>	<p>Find as many combinations of 8 as you can. They can be addition or subtraction equations. (Ex. 4+4, 9-1)</p> <p>Write your sight words 3 times each.</p>	<p>Find as many combinations of 10 as you can. They can be addition or subtraction equations. (ex: 6+4=10; 10-6=4)</p>	<p>Find as many combinations of 13 as you can. They can be addition or subtraction equations.</p> <p>Journal Prompt-Over winter break, I... Write 3-5 sentences and draw a detailed picture.</p>	<p>Find as many combinations of 16 as you can. They can be addition or subtraction equations.</p>																																								
<p>Week 3</p> <p>(L. 12 sight words)</p> <p>been, brown, know, never, off, out, own, very</p>	<p>I have 14 pieces of fruit. Some are blueberries. Some are oranges. How many of each could I have? How many blueberries? How many oranges? Find as many combinations as you can.</p> <p>Write your sight words 3 times each.</p>	<p>I have 10 pieces of candy. Some are suckers. Some are M& M's. How many of each could I have? How many suckers? How many M& M's? Find as many combinations as you can.</p> <p>Use each of your sight words in a sentence.</p>	<p>I have 8 animals. Some are dogs. Some are cats. How many of each could I have? How many dogs? How many cats? Find as many combinations as you can.</p>	<p>I have 12 cars. Some are blue. Some are green. How many of each could I have? How many blue? How many green? Find as many combinations as you can.</p>																																								
<p>Week 4</p> <p>(L. 13 sight words)</p> <p>down, fall, goes, green, grow, new, open, yellow</p>	<p>☆</p> <p>Find the fact families for the following numbers:</p> <table style="margin-left: auto; margin-right: auto;"> <tr> <td style="text-align: center;">3</td> <td style="text-align: center;">6</td> </tr> <tr> <td style="text-align: center;">+ _____ = _____</td> <td style="text-align: center;">+ _____ = _____</td> </tr> <tr> <td style="text-align: center;">_____ + _____ = _____</td> <td style="text-align: center;">_____ + _____ = _____</td> </tr> <tr> <td style="text-align: center;">- _____ = _____</td> <td style="text-align: center;">- _____ = _____</td> </tr> <tr> <td style="text-align: center;">_____ - _____ = _____</td> <td style="text-align: center;">_____ - _____ = _____</td> </tr> </table> <p>Write your sight words 3 times each.</p>	3	6	+ _____ = _____	+ _____ = _____	_____ + _____ = _____	_____ + _____ = _____	- _____ = _____	- _____ = _____	_____ - _____ = _____	_____ - _____ = _____	<p>Find the fact families for the following numbers:</p> <table style="margin-left: auto; margin-right: auto;"> <tr> <td style="text-align: center;">8</td> <td style="text-align: center;">10</td> </tr> <tr> <td style="text-align: center;">+ _____ = _____</td> <td style="text-align: center;">+ _____ = _____</td> </tr> <tr> <td style="text-align: center;">_____ + _____ = _____</td> <td style="text-align: center;">_____ + _____ = _____</td> </tr> <tr> <td style="text-align: center;">- _____ = _____</td> <td style="text-align: center;">- _____ = _____</td> </tr> <tr> <td style="text-align: center;">_____ - _____ = _____</td> <td style="text-align: center;">_____ - _____ = _____</td> </tr> </table>	8	10	+ _____ = _____	+ _____ = _____	_____ + _____ = _____	_____ + _____ = _____	- _____ = _____	- _____ = _____	_____ - _____ = _____	_____ - _____ = _____	<p>☆</p> <p>Find the fact families for the following numbers:</p> <table style="margin-left: auto; margin-right: auto;"> <tr> <td style="text-align: center;">7</td> <td style="text-align: center;">4</td> </tr> <tr> <td style="text-align: center;">+ _____ = _____</td> <td style="text-align: center;">+ _____ = _____</td> </tr> <tr> <td style="text-align: center;">_____ + _____ = _____</td> <td style="text-align: center;">_____ + _____ = _____</td> </tr> <tr> <td style="text-align: center;">- _____ = _____</td> <td style="text-align: center;">- _____ = _____</td> </tr> <tr> <td style="text-align: center;">_____ - _____ = _____</td> <td style="text-align: center;">_____ - _____ = _____</td> </tr> </table> <p>Journal Prompt-My favorite animal is... Write 3-5 sentences and draw a detailed picture.</p>	7	4	+ _____ = _____	+ _____ = _____	_____ + _____ = _____	_____ + _____ = _____	- _____ = _____	- _____ = _____	_____ - _____ = _____	_____ - _____ = _____	<p>Find the fact families for the following numbers:</p> <table style="margin-left: auto; margin-right: auto;"> <tr> <td style="text-align: center;">5</td> <td style="text-align: center;">9</td> </tr> <tr> <td style="text-align: center;">+ _____ = _____</td> <td style="text-align: center;">+ _____ = _____</td> </tr> <tr> <td style="text-align: center;">_____ + _____ = _____</td> <td style="text-align: center;">_____ + _____ = _____</td> </tr> <tr> <td style="text-align: center;">- _____ = _____</td> <td style="text-align: center;">- _____ = _____</td> </tr> <tr> <td style="text-align: center;">_____ - _____ = _____</td> <td style="text-align: center;">_____ - _____ = _____</td> </tr> </table>	5	9	+ _____ = _____	+ _____ = _____	_____ + _____ = _____	_____ + _____ = _____	- _____ = _____	- _____ = _____	_____ - _____ = _____	_____ - _____ = _____
3	6																																											
+ _____ = _____	+ _____ = _____																																											
_____ + _____ = _____	_____ + _____ = _____																																											
- _____ = _____	- _____ = _____																																											
_____ - _____ = _____	_____ - _____ = _____																																											
8	10																																											
+ _____ = _____	+ _____ = _____																																											
_____ + _____ = _____	_____ + _____ = _____																																											
- _____ = _____	- _____ = _____																																											
_____ - _____ = _____	_____ - _____ = _____																																											
7	4																																											
+ _____ = _____	+ _____ = _____																																											
_____ + _____ = _____	_____ + _____ = _____																																											
- _____ = _____	- _____ = _____																																											
_____ - _____ = _____	_____ - _____ = _____																																											
5	9																																											
+ _____ = _____	+ _____ = _____																																											
_____ + _____ = _____	_____ + _____ = _____																																											
- _____ = _____	- _____ = _____																																											
_____ - _____ = _____	_____ - _____ = _____																																											



January Homework Calendar



	Monday	Tuesday	Wednesday	Thursday
Week 5 (L. 14 sight words) four, five, into, over, starts, three, two, watch	☆ Find the missing number. Show your work. $3 + \underline{\quad} = 6$ $8 - \underline{\quad} = 5$ $\underline{\quad} + 6 = 9$ $\underline{\quad} - 6 = 1$ $3 + \underline{\quad} = 3$ $10 + \underline{\quad} = 14$ Write your sight words 3 times each..	Find the missing number. Show your work. $8 + \underline{\quad} = 16$ $4 - \underline{\quad} = 1$ $\underline{\quad} + 10 = 10$ $\underline{\quad} - 6 = 2$ $9 + \underline{\quad} = 5$ $7 + \underline{\quad} = 14$ Use each of your sight words in a sentence.	Find the missing number. Show your work. $9 + \underline{\quad} = 17$ $6 - \underline{\quad} = 4$ $\underline{\quad} + 8 = 12$ $\underline{\quad} - 5 = 5$ $0 + \underline{\quad} = 6$ $5 + \underline{\quad} = 8$	Find the missing number. Show your work. $4 + \underline{\quad} = 12$ $3 - \underline{\quad} = 0$ $\underline{\quad} + 5 = 8$ $\underline{\quad} - 4 = 6$ $8 + \underline{\quad} = 14$ $5 + \underline{\quad} = 13$