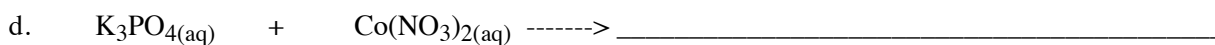
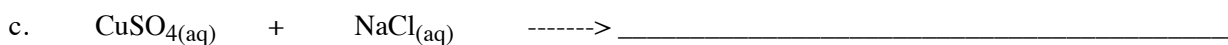
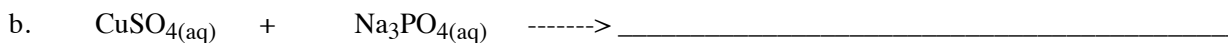


1. Predict products for the following reactions. Include phase subscripts, and balance each reaction that occurs.



2. **Predict the products** of each of the following reactions. (2 of them will be "N.R.")

Include **subscripts** for (aq) and (s), and **balance** the reactions.

