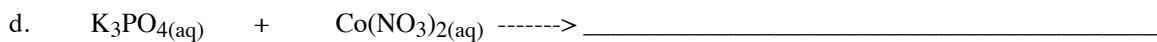
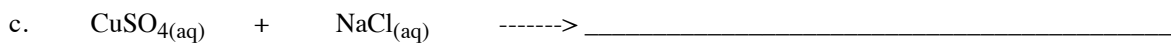
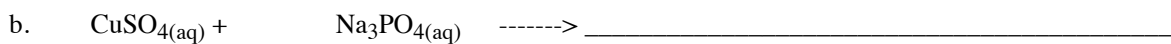


1. Predict products for the following reactions. Include phase subscripts, and balance each reaction that occurs.



2. Predict the products of each of the following reactions. (3 of these will be N.R.)

Include **subscripts** for (aq) and (s), and **balance** the reactions with a star (*) next to them.

