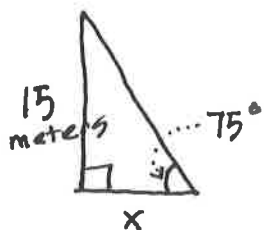


# Triangle Assignment

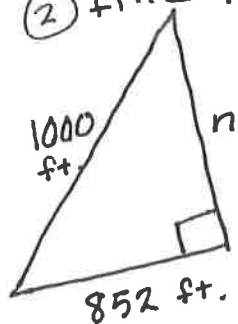
Name \_\_\_\_\_

Per. \_\_\_\_\_

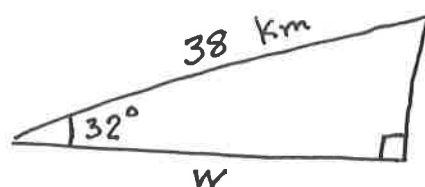
① find  $x$



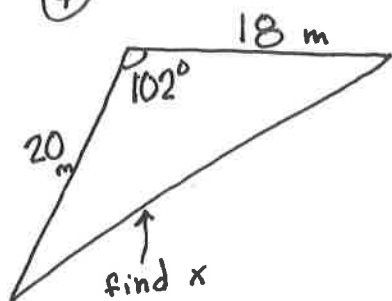
② find  $n$



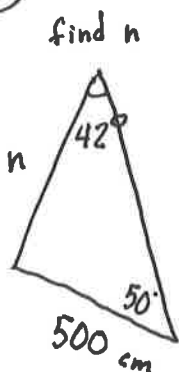
③ find  $w$



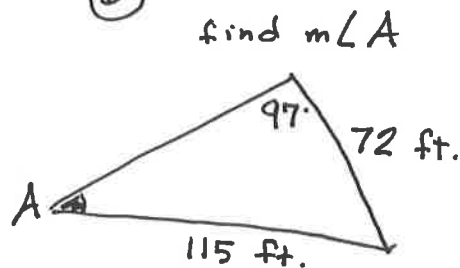
④



⑤



⑥



Careful: The triangles for questions ④, ⑤, and ⑥ are non-right triangles.